



VINAYAKAR MATRICULATION HIGHER SECONDARY SCHOOL, SIVAKASI.  
QUESTIONS – Set 04 With Answers

CLASS : I NAME :  
DATE : 12-04-2020


ROLL NO :  
MARKS : 10 TIME : 10mts

A. ✓ Tick the correct option.





1. Which of these is a machine?



2. Which computer fits in our palm?



B. ✓ Tick the places where we use computers.





VINAYAKAR MATRICULATION HIGHER SECONDARY SCHOOL, SIVAKASI.  
QUESTIONS – Set 04 With Answers

CLASS : I NAME :

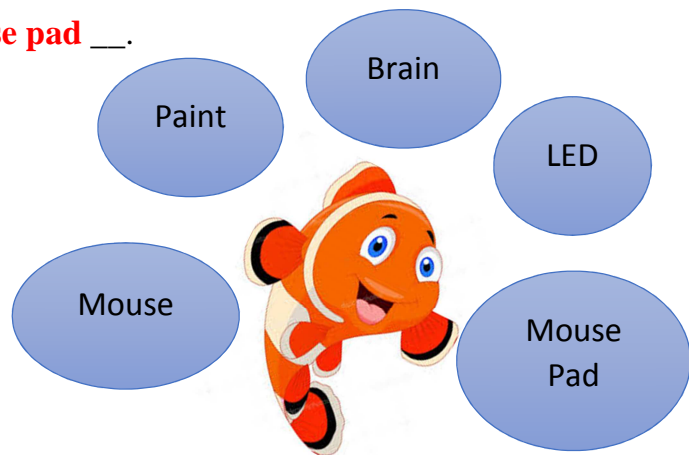
DATE : 12-04-2020

ROLL NO :

MARKS : 10 TIME : 10mts

**C. Fill in the blanks with the right words.**

1. CPU is known as the **Brain** of a computer
2. The pictures are very clear in an **LED** monitor.
3. A **Mouse** is the pointing part of a computer.
4. We use **Paint** program to draw pictures.
5. Always keep the mouse on a **. Mouse pad**.



**Answers:-**

**A.**

1. Picture 1
2. Picture 3

**B.**

Picture 1,2,3

**C.**

1. Brain
2. LED
3. Mouse
4. Paint
5. Mouse pad